

**Atomic Energy Education Society  
Annual Examination- 2018-19**

**Class : III  
Subject : EVS**

**Time : 3 Hours  
Marks : 80**

**To be filled by the student**

Student's name : \_\_\_\_\_

Name of the School : \_\_\_\_\_

Class / Sec. : \_\_\_\_\_ Roll No. : \_\_\_\_\_

Date of Examination : \_\_\_\_\_

**To be filled by the teacher**

Invigilator's Sign : \_\_\_\_\_

Examiner 's Sign : \_\_\_\_\_

Marks Obtained : \_\_\_\_\_

Checker's Sign : \_\_\_\_\_

**General Instructions**

This paper consists of:

Section A: Observation and Reporting ----- 30 marks

Section B: Identification and Classification ----- 25 marks

Section C: Discovery of Facts ----- 25 marks

All the questions are compulsory.

**Section A: Observation and reporting (30 marks)**

**1. Fill in the blanks with the correct words given in the brackets. (1x10=10)**

- a) Louis Braille belonged to \_\_\_\_\_. ( England / France )
- b) \_\_\_\_\_ helps to cure toothache. ( clove / banana )
- c) Phudgudi and Bhanate were \_\_\_\_\_. ( enemies / friends)
- d) A chess board has \_\_\_\_\_ squares. (64/74)
- e) After a long journey of five to six days Reena's letter reached \_\_\_\_\_.  
( Mumbai / Delhi )
- f) \_\_\_\_\_ is the cheapest means of communication. (inland letter / postcard)
- g) Bhupen lived in Molan village in \_\_\_\_\_ state. (Bihar / Assam)
- h) \_\_\_\_\_ is prepared with almonds and cardamom.(Kahwa/coffee)
- i) The walls of houses in Rajasthan are very \_\_\_\_\_. (thick/thin)
- j) Sitamma lived in a small city \_\_\_\_\_. ( Guntoor / Chennai )

**2. Name the following.**

**(1x5=5)**

- a) A team game \_\_\_\_\_.
- b) A place where bricks and clay pots are baked. \_\_\_\_\_.
- c) A person who makes things from iron \_\_\_\_\_.
- d) Indian player Sania Mirza plays this game \_\_\_\_\_.
- e) Special type of boat used in Srinagar \_\_\_\_\_.

**3. Solve the following riddles and write the name of the game. (1x2=2)**

a) King, queen, ace and jack,

Fifty two of them make a pack. \_\_\_\_\_

b) Small and coloured are these balls,

To win the game you have to aim with them all. \_\_\_\_\_

**4. Answer the following questions in one or two sentences. (2x4=8)**

a) What do you mean by indoor games?

---

---

b) Write any two ways of saving water.

---

---

c) How do people go up in multi storeyed building ?

---

---

d) List any two works done in a hospital.

---

---

5. Write your complete postal address in the box given below. (5)

**Section B: Identification and Classification (25 marks)**

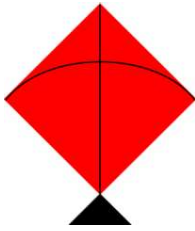
6. The names of some food items are given below. Write the names in the correct column. (1/2 x10=5)

(Honey, Turmeric, Fish, Corn, Meat, Lemon, Cheese, Spinach, Ghee, Mango)

Food items we get from plants	Food items we get from animals

**7. Identify the pictures and write their names.**

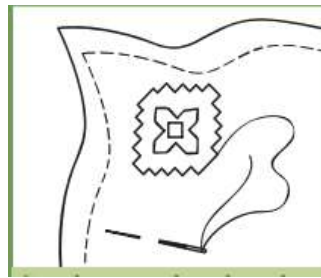
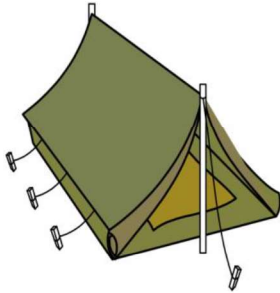
**(1x5=5)**



a) \_\_\_\_\_

b) \_\_\_\_\_

c) \_\_\_\_\_



d) \_\_\_\_\_

e) \_\_\_\_\_

**8. Give reason.**

**(2x2=4)**

a) Sieve is attached to the mouth of pipe that leads to the Tanka.

---

---

---

b) Houses are made on bamboo pillars in Assam.

---

---

---

**9. Answer the following questions.**

**(2x3=6)**

a) What are the differences between a letter and a phone call?

---

---

---

---

b) Which members of Totaram's family live in the city? Why?

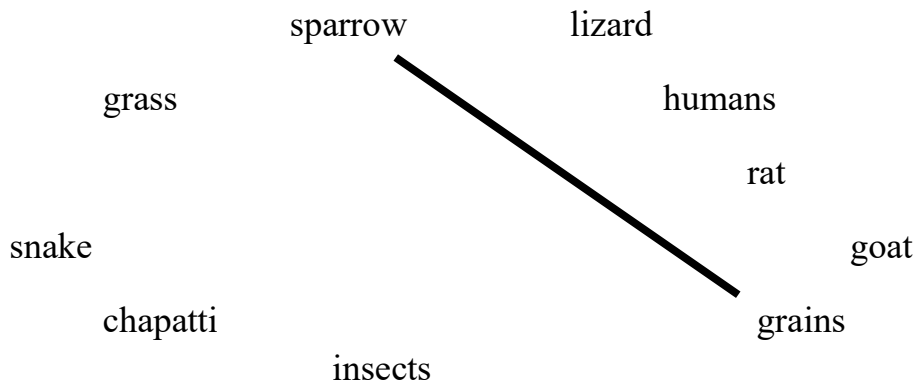
---

---

---

---

c) Who eats what? **Match by drawing lines** of different colours. One example is done for you.



10. Write five sentences on 'Braille Script'.

(1x5=5)

---

---

---

---

---

---

---

---

**Section C: Discovery of Facts (25 marks)**

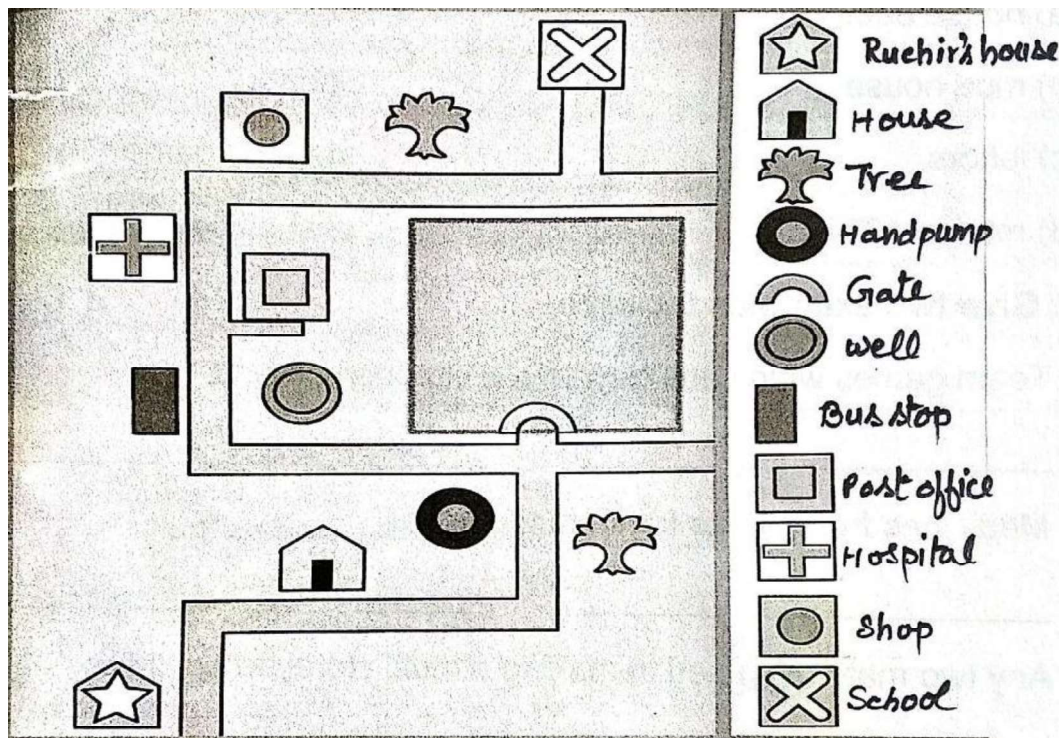
**11. Circle the odd one.**

**(1x5=5)**

- |            |         |        |               |
|------------|---------|--------|---------------|
| a) spinach | potato  | egg    | lady's finger |
| b) mango   | apple   | orange | milk          |
| c) cow     | bicycle | horse  | goat          |
| d) chess   | stappoo | banana | Kabaddi       |
| e) Dupatta | T-shirt | Saree  | Turban        |

**12. Look at the map given below and complete the following.**

**(1x5=5)**



- a) The hand pump is near the \_\_\_\_\_ . ( school / house )
- b) There are two \_\_\_\_\_ in the map. ( trees / hospitals )
- c) The school is \_\_\_\_\_ from Ruchira's house. ( far / near )
- d) The \_\_\_\_\_ is between the school and the hospital. ( shop / hand pump )
- e) The bus stop is near the \_\_\_\_\_ ( well / school )

**13. Answer the following questions.**

**(2x5=10)**

a) Write any two uses of water.

---

---

---

b) What are the materials used for making houses?

---

---

---

c) Why should we play games?

---

---

---

d) Why are symbols used in a map?

---

---

---

e) Houses in hilly area have slopping roofs. Why ?

---

---

---





**14. Draw a design for a dupatta and colour it.**

**(3)**



**15. Draw any two roots that you eat and colour them.**

**(1x2=2)**



-----\*\*\*\*\*-----