

Section A: Observation and Reporting (30 marks)

Q1. Fill in the blanks with the correct words given in the brackets. (1x10=10)

- a) A special way of reading and writing for people who cannot see is called _____ . (Braille /Gurmukhi)
- b) The pots are dried in the sun and _____ in the fire. (Kiln / baked)
- c) _____ helps when we get hurt. (Turmeric / Banana)
- d) _____ is surrounded by blue mountains. (Char Chinari / Delhi)
- e) Telephone is a means of _____.(communication / transportation)
- f) A trowel is made by a _____. (Blacksmith / Goldsmith)
- g) Tanks (tanka) are made to collect _____ water (sea/rain)
- h) _____ is prepared with almonds and cardamom. (Kahwa/ Coffee)
- i) A football game has _____ (11 / 10) players in each team.
- j) _____ are woven to make a cloth. (Papers / Threads)

Q2. Name the following:

(1x5=5)

- a) Any one hilly area _____
- b) Cloth people wear unstitched. _____
- c) Leaves that we eat (any one) _____
- d) Game which we play with a ball. _____
- e) A place where there is a severe water scarcity during summer. _____

Q3. We keep some pet animals at home. We look after them too. In the following table names of such animals are given. Complete the table. (2)

Name of the animal	Why do we keep them
Cow/Buffalo	
Hen	

Q4. Identify the animal. Write the name and four sentences about this animal. (5M)



1. _____
2. _____
3. _____

Q5. Answer the following:

(2x4=8)

a) Why do blind people carry a white stick when they go out?

b) Which of the two do you like more – writing a letter or making a phone call?
Why?

c) How does one enter the houses made on bamboo pillars in Assam?

d) Write any two ways of re-using water.

Section - B : Identification and Classification (25 Marks)

Q6. Write Yes/ No against the following statements.

(1 x 5 = 5)

- a) The family members love each other very much. ()
- b) Letters are sorted in shops. ()
- c) Lion is a pet animal that we keep in our house. ()
- d) Birds eat insects. ()
- e) Shikara is a type of boat found in Kashmir. ()

Q7. Give reasons:


(2 X 2=4)





- a) People prefer to make a call instead of writing a letter.

- b) Sieve is attached to the mouth of the pipe that is attached to the tanka.

Q8. Identify the pictures and write their names in the boxes.

(1 X 5 =5)

Picture	Name
	

Q9. Answer the following:

(2x3=6)

a) Who does not help in cooking food in the family and why?

b) Why did the crow need a pot?

c) Why are symbols used in a map?

Q10. Write the process of posting a letter in correct order.

(5)

Section - C : Discovery of Facts (25 Marks)

Q11. Circle the odd one.

(1 x 5 = 5)

- | | | | | |
|----|-----------|----------|--------|----------|
| a) | Flower | soil | leaf | stem |
| b) | Telephone | Postcard | E-Mail | Whatsapp |
| c) | carrot | mango | apple | guava |
| d) | Turmeric | Tulsi | Eggs | Ginger |
| e) | Air | Water | Food | Rat |

Q12. Answer the following:

(2X5=10)

a) What do living things need to live?

b) Write any two things for which we are dependent on animals.

c) What are the things the family members do together ? (any 2 points)

d) Who fetches water in Madho's house and what does he fetch water in?

e) Write names of any four animals those you cannot touch.

Q13. We eat different parts of a plant. Put these food items in the correct column. (2)



Ginger, Spinach, Curry Leaves, Radish

Leaves	Roots

Q14. Write and draw one plant product and one animal product. (4)

Plant product

Animal Product



Q15. Draw and name.

a) any one means of communication.

b) any one road sign (4)

