

# Atomic Energy Education Society

## Annual Examination – 2018-19

**Class: IV**

**Time: 3 hours**

**Subject :EVS**

**Marks : 80**

---

**To be filled by the student**

Student's Name : \_\_\_\_\_

Name of the School : \_\_\_\_\_

Class / Sec : \_\_\_\_\_ Roll No.: \_\_\_\_\_

Date of Examination : \_\_\_\_\_

---

**To be filled by the teacher**

Invigilator's Sign : \_\_\_\_\_

Examiner's Sign : \_\_\_\_\_

Marks Obtained : \_\_\_\_\_

Checker's Sign : \_\_\_\_\_

---

**General Instructions:**

This paper consists of:

Section A: Observation and Reporting ----- 30 marks

Section B: Identification and Classification ----- 25 marks

Section C: Discovery of Facts ----- 25 marks

All the questions are compulsory.

**OBSERVATION (30 Marks)**

**1) Fill in the blanks.**

**(5 X1 =5)**

a)



In a parade four \_\_\_\_\_ march behind the leader.

(people / platoons / soldiers)

b)



This type of special food eaten in Gurudwara is called \_\_\_\_\_.

( bhojan / khana –khajana / langar )

c)



Mountains made of sand are called \_\_\_\_\_ .

(sand dunes / sand hills / sand garden)

d)



This implement is used to \_\_\_\_\_ the soil. (level / dig / water )

e)



The value of this note is \_\_\_\_\_. (Rs 1000 / Rs 100 / Rs 10)

**2. Observe the pictures related to a festival and fill in the blanks. (3 X1 =3)**



a) People are celebrating \_\_\_\_\_ festival. (Bihu / Holi /Lohri)

b) During the festival people make house of bamboo and grass which is called \_\_\_\_\_. ( Hut / Bhela Ghar / House boat)

c) People light \_\_\_\_\_while celebrating thefestival. (Mezi/paper/plant)

**3. Name the following.**

**(4x1=4)**

- a) A spice used when the tooth aches. \_\_\_\_\_
- b) The traditional dress of women in Assam. \_\_\_\_\_
- c) The solution which is given during diarrhoea and cholera. \_\_\_\_\_
- d) It is very old form of folk art in Bihar. \_\_\_\_\_

**4. Write whether the statements are true or false.**

**(3x1=3)**

- a) Unwanted plants are called weeds. \_\_\_\_\_
- b) Desert Oak tree is found in Australia. \_\_\_\_\_
- c) Dollar is the currency used in Abu Dhabi. \_\_\_\_\_

**5. Answer the following questions.**

**(5 X 2 =10)**

a) What is Mid-day Meal?

---

---

---

b) Why did Chuskit's grandfather have tears in his eyes?

---

---

---

---

---

c) Why does Wahida make sure that there are no garbages and rats on the ship?

---

---

---

d) What interesting things did Shanta see from the plane?

---

---

---

e) When do birds leave their nests?

---

---

---

**6. Write the process of making Pochampalli sarees.**

**(1 X 5 =5)**

---

---

---

---

---

---

---

---

---

---

**IDENTIFICATION AND CLASSIFICATION (25)**

**7. Classify the names of vegetables and fruits in the correct column. (4 X 1 = 4)**

( Pineapple, Tomato, Grapes, Jackfruit )

SMOOTH TO TOUCH	ROUGH TO TOUCH

**8. Identify - Who am I?**

**(2 X 1= 2)**

a) Grind me and powder me  
to make your food yellow.

Who am I ? \_\_\_\_\_

b) I don't make my own nest,  
I lay my eggs in a crow's nest

Who am I? \_\_\_\_\_

**9. Match the column A and Column B correctly.**

**(4 X 1 = 4)**

**COLUMN A**

**COLUMN B**

a) National bird	i) KadhahPrasad
b) Dhondu	ii) Peacock
c) A kind of halwa	iii) Garam Masala
d) A powder of mixture of several spices	iv) Chakki machine

**10. Answer the following.**

**(5 X 2 = 10)**

a) What were the differences between Chuskit and the other children?

	<b>Chuskit</b>	<b>Other children</b>
i)		
ii)		

b) What are the two different things for which birds make their nests ?

---

---

---

c) Name any two vegetables which are roots.

---

---

---

d) Write any two differences between Abu Dhabi and Kerala.

	<b>Abu Dhabi</b>	<b>Kerala</b>
i)		
ii)		

e) List any two ways of cleaning water.

---

---

---

**11. What were the differences between the houses in area where Mama lived and the houses in a high-rise building? (5 X1 =5)**





	House in area where Mama lived	Houses in a high – rise building
i)		
ii)		
iii)		
iv)		
v)		



**DISCOVERY OF FACTS (25)**

**12. Match the bird's feet – Different kind for different needs.**

**( 4 X 1 = 4)**

COLUMN A	COLUMN B
a)  To swim in water	i) PARROT
b)  To hold the tree branches	ii) DUCK
c)  To catch the prey (what it hunts)	iii) OSTRICH
d)  To walk on the land	iv) EAGLE

**13. Complete the table with the words given in the help box. (6 x 1 = 6)**

(Jammu Medical College, Submarine, Thannamandi, Prism, Open file, M. B. B. S.)

a) Wahida's village -	
b) Wahida's college -	
c) Wahida's qualification degree -	
d) A ship that can go underwater -	
e) A glass, that gives out seven colours -	
f) Any one command given for the parade -	

**14. Give reasons. (3 X 2 = 6)**

a) Roots are an important part of a tree.

---

---

---

b) Weavers are giving up their family craft.

---

---

---

c) People of Holgundi area in Karnataka had to leave their village.

---

---

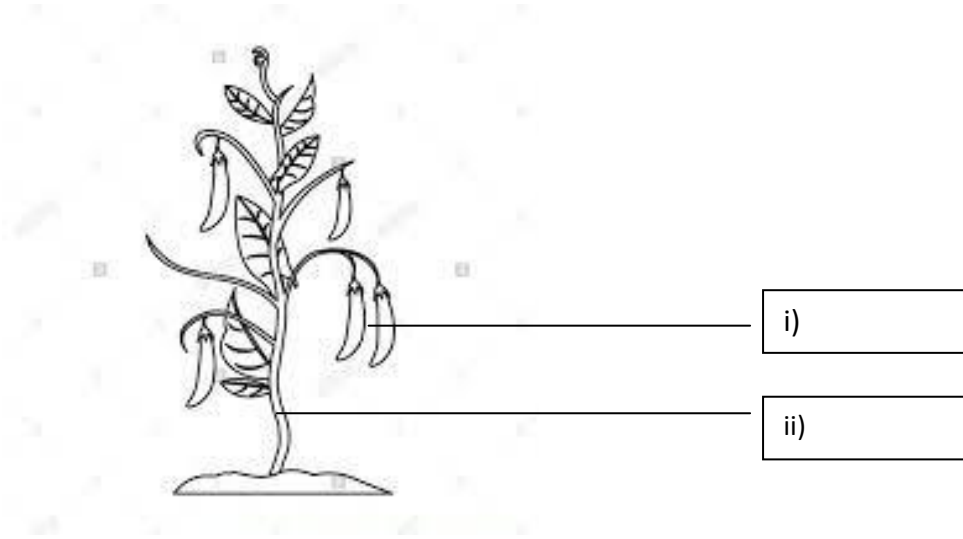
---

---

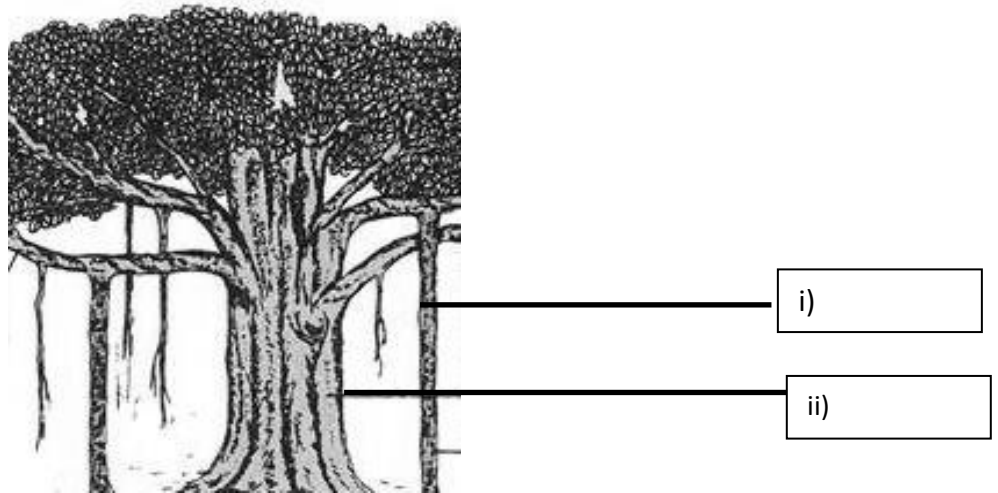
15. Label the parts.

(2 X 2 = 4)

a)



b)



**16. Show the following places in the given map.**

**(1 X 5 =5)**

- i) Jammu and Kashmir    ii) Kerala    iii) Karnataka    iv) Assam    v) Maharashtra

