


OBSERVATION AND REPORTING (30 MARKS)

Q.1. Observe the picture and fill in the blanks.


(1 x 5 = 5)



a) She is Lieutenant _____ Wahida Prism.
(Commander, Major, General)




b) _____ roots are like pillars that provide strong support to this tree.
(Flying, Moving, Hanging)



c) The bird which does not make its own nest is _____.
(Myna, koel, crow)



d) Pilloo aunty paid the money for seven kulfis. This shows her _____
(honesty, friendliness, enmity)



e) _____ helps to soothe toothache.
(Clove, Cardamom, Turmeric)

Q.2. Name the following.

(1 X 4 =4)

- a) Meal given to all children at primary school in our country is-----
- b) A bird that uses its sharp beak to stitch together two leaves is -----
- c) A thing which has become famous by the name of the place where it is made is -----
- d) It grows in fields and gardens without being planted. It is -----

Q.3. Observe the picture and fill in the blanks.

(1 X 6 = 6)



- a) _____ village is famous for pochampalli sarees.
(Belvanika , Mukhtapur , Nagpur)
- b) Threads are _____ to give bright colours.
(dried, dyed, broke)
- c) Thread bundles are put onto _____ to weave the cloth.
(loom , look , mixer)
- d) The Pochampalli traditional _____ is in danger.
(art, craft, dance)
- e) We need to help weavers by helping them get a better _____.
(food, prize, price)
- f) _____ have become famous by the name of the place where they are made.
(Kulluchappals, Kullu shawls, Kullu kulfies)

Q4) Answer the following questions.

(2 X 5 = 10)

a) Why do vegetable sellers sell the previous day's vegetables first?

b) What do you mean by First-Aid?

c) What are the ingredients required for the preparation of Kadhah prasad?

d) Why do squirrels keep gnawing on things?

e) What kind of clothes do people in Abu Dhabi wear?

Q.5. Write down the five steps involved in growing onion crops in the correct order. (5)

IDENTIFICATION AND CLASSIFICATION (25)

Q.6. Identify the following. (1X2=2)

a) I am black when I am whole.
I can be powdered coarse or fine.

A sharp and spicy taste is mine.

Who am I?

Ans _____

b) I am a precious paper.

I have different values and come in different colours.

People use me for buying things.

I am called by different names in different countries.

Who am I?

Ans _____

Q. 7. Classify the following in the correct column.

(1 X4=4)

Carrot,

Cucumber,

Brinjal,

Radish

ROOTS	FRUITS

Q.8. Circle the odd one.

(1 x 4 = 4)

a) Khunti

Illige

Forcep

Kurige

b) Beak

Wings

Nest

Feet

c) Pongal

Bihu

Diwali

Sankraanthi

d) squirrel

barbet

sunbird

koel

Q.9. Answer the following.

(2 x 5 = 10)

a) List any two duties of a naval doctor in the Indian Navy.

b) Write about different types of teeth that animals have –

cat - _____

snake - _____

c) Write two different ways to save water.

d) Classify the following fruits and vegetables in the correct column.

Carrot, Tomato, Beetroot, Jackfruit,

Seedless fruits and vegetables	Fruits and vegetables with seeds

e) What are the differences between boarding schools and other schools?

	Boarding Schools	Other Schools
(i)		
(ii)		

Q.10. Compare Abu Dhabi with Kerala and write in the table.

(Use the following points.)

(5)




	Abu Dhabi	Kerala
i) The trees and plants		
ii) Location		
iii) Currency		
iv) Language		
v) What people wear		

DISCOVERY OF FACTS - (25 MARKS)

Q.11. Complete the table by writing the states of India in which the following cities /districts are located. (3 X 1 = 3)





Rajouri district	
Pochampalli	
Bhavnagar	

Q.12. Read the information and fill in the blanks. (1X 3=3)

		
<p>PLOUGHING- The loosening and turning of soil during ploughing bring nutrient-rich soil to top.</p>	<p>WEEDING- The process of removing weeds is called Weeding.</p>	<p>SPRINKLING OF SEEDS – Kurige is used to sprinkle the seeds.</p>

- a) The animal most commonly used for ploughing the field is _____.
- b) We must drop right amount of _____ at a regular distance.
- c) If there are too many weeds, they will take up all the water and _____.

Q.13. Match the bird's beak according to their food habit. (1X4 =4)

Bird's beak	Food habit
a	i To find insects and worms from mud and shallow water.
	
b	ii To tear and eat meat.
	
c	iii To break and crush seeds.
	
d	iv To make holes in wood and tree trunks.
	

Q.14. Give reasons. (Two points) (2 X 3 =6)

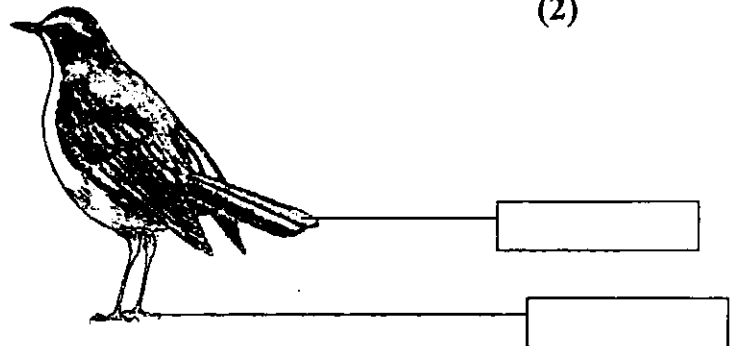
a) It is important to remove weeds from the field.

b) Chuskit couldn't go to school like other children.

c) People of Holgundi area had to leave the village.

Q.15. Label the parts of a bird.

(2)



Q.16. A seed is soaked overnight and kept on a wet cotton wool. Draw a picture of the seedling as it looks on the eighth day.

(2)

Q17. Show the following places on the map.

(1 X 5 = 5)

- i) Jammu and Kashmir ii) Kerala iii) Telangana iv) Maharashtra
v) Assam

