

SECTION - A

OBSERVATION AND REPORTING (30 MARKS)

Q.1 Choose the correct answer and fill in the blanks. (1 x 5 = 5)

i) A mirror becomes _____ when we blow air on it.

(clear hazy dry)

ii) What is the meaning of 'Jule' in the language of Changpas?

(Thank you Please Welcome)

iii) Cheraw dance is the special dance of

(Mizoram Nagaland Odisha)

iv) _____ is everything for adivasis.

(Water Forest Air)

v) Vehicles which run on CNG produce _____ smoke.

(more no less)

Q.2 Observe the picture and answer the following. (2x 5 = 10)


a)



i) What is shown in the picture?

ii) What is this place used for?

b)



i) Name the thing in the picture.

ii) What do the village people do with it?

c)



i) Name the person in the picture.

ii) Which sport is she associated with?

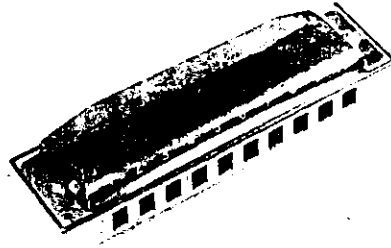
d)



i) What is this tent called?

ii) What is this tent made of?

e)



i) Which musical instrument is shown in the picture?

ii) How is this instrument used for making sound?

Q.3 Match the following

(1 x 5 = 5)

1. Bacchu Khan

a) Constitution of India

2. Tashi

b) Kutch area of Gujarat

3. Dr. Babasaheb Ambedkar

c) Jharkhand

4. Jasma

d) Nagpada Basketball Association

5. Suryamani

f) Leh

Answers: i _____ ii _____ iii _____ iv _____ v _____

Q.4 Circle the odd one out.

(1 x 5 = 5)

- | | | | |
|--------------|-------------|----------|----------|
| i) Jharkhand | Sikkim | Punjab | Goa |
| ii) cleaning | rag picking | sweeping | teaching |
| iii) bus | cycle | car | auto |
| iv) football | basketball | cricket | carrom |
| v) bajra | maize | tomato | wheat |

Q.5 This is a Journey of a bajra seed from field to a plate.

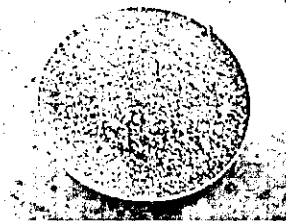
Write what can you see in the pictures given below. (1 x 5 = 5)



a) _____



b) _____



c) _____



d) _____



e) _____

SECTION - B

IDENTIFYING GROUP AND CLASSIFICATION (25 MARKS)

Q.6. Answer the following in one word.

(1 x 4 = 4)

a) The main crop of Mizoram _____

b) A big wall built across the river _____

c) A person who trains the players in a particular game _____

d) A beautiful carving on wood can be seen on the ceiling of houseboats and some big houses. This design is called _____.

Q.7. Give examples:

(1 x 6 = 6)

a) Two cereals.

b) Two states which have very thick forest in India.

c) Two uses of petroleum.

d) Two traits we acquire from our family

e) Two animals living at high altitudes.

f) Two things that children learnt at Khedi village

Q. 8. Give reasons.

(3 x 2 = 6)

a) Saima Sir did not take more land for farming in a lottery.

b) People blow on spectacles to clean them.

c) One should go under the table during an earthquake.

Q.9. Write any two Khedi village and Jatrya's dream village. (2)

Khedi Village	Jatrya's dream Village

Q.10. Classify the capitals given in the box as per their states. ($\frac{1}{2} \times 4 = 2$)

Gandhinagar ,	Jaipur ,	Mumbai ,	Chandigarh
---------------	----------	----------	------------

Maharashtra	Gujarat	Rajasthan	Haryana

Q.11. Look at the picture carefully and answer the following. (1 x 5 = 5)



i) Name the natural calamity in the picture

ii) When (date & year) did this natural calamity occur in Kutch area of Gujarat?

iii) Name two agencies that help us during a natural disaster.

iv) Why did scientists come to Jasma's village?

v) What kind of help would people need when they lose their home and belongings during a natural calamity ?

SECTION- C

DISCOVERY OF FACTS (25 MARKS)

Q.12. Tick the correct answer :

(1 x 5 = 5)

i. What is the award in the field of sports in India ?

a) Padma Bhushan

b) Padma Shri

c) Arjuna Award

d) Bharat Ratan

ii. A state in which Adalaj stepwell is located -

a) Madhya Pradesh

b) Gujarat

c) Maharashtra

d) Rajasthan

iii. On which plant did Gregor Mendel carried out experiments?

- a) channa
- b) oats
- c) pea
- d) jowar

iv. Changthang is located at a height of -

- a) 4500 metres
- b) 5000 metres
- c) 5500 metres
- d) 6000 metres

v. Where were the good bajra seeds stored in ?

- a) bitter gourd
- b) pumpkin
- c) dried gourd
- d) water melon

Q.13. Answer the following questions.

(2 x 5= 10)

1. What is the full form of LPG?

Suggest some ways to save petrol.

2. What kind of difficulties do the people face in doing cleaning jobs?

3. Which trick did mama use to identify Suvasini and Saroja?

4. What is gender bias?

5. How did all the girls prepare for the game under the guidance of coach sir?

Q.14. Write a short note (75 to 100 words) on pashmina shawl. (5)

Blank lined writing area with 20 horizontal lines.

Q.15. Write the states related to the following and locate the states in the map given below. (1 X 5 = 5)

- 1) Nallappa Reddy belongs to the state of _____
- 2) Suvasini lives in the state of _____
- 3) Shikara (Houseboat) _____
- 4) Dehri village _____
- 5) Nagpada Basketball Association _____

