

ATOMIC ENERGY CENTRAL SCHOOL No 3 RAWATBHATA

Class: III

1st Periodic Test 2019-20

Subject: Mathematics

Duration: 1 Hour 30 Min

Max Marks: 40

Name _____

Roll No _____

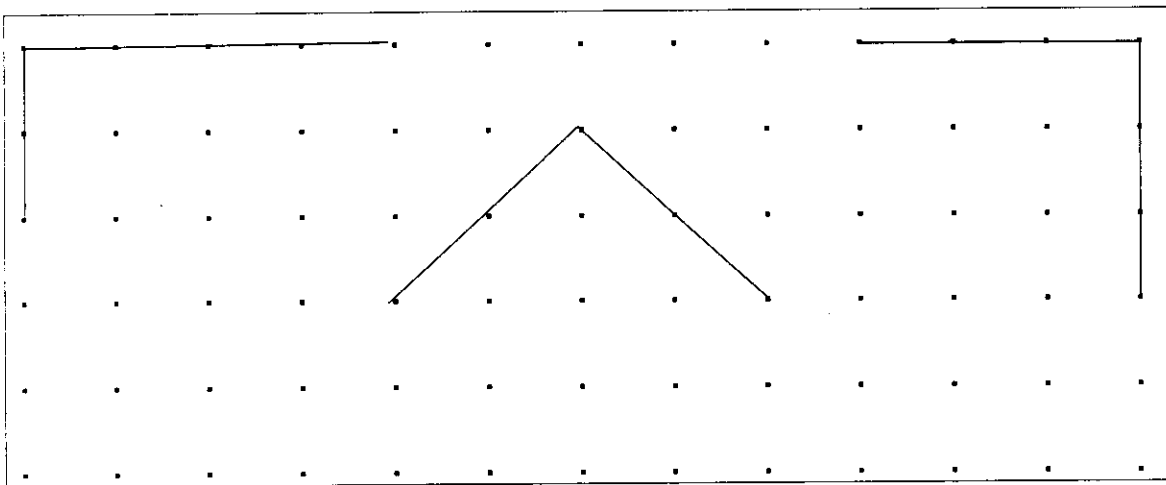
M. O. _____

Date: 25 - 07 - 2019.

Invigilator. _____

Examiner. _____

Q.1. Complete these figures to make rectangle, square and triangle; one each.



3

Q.2. Continue the pattern.

a) 900, 800, 700, _____, _____

b) 435, 445, 455, _____, _____

c) 750, 800, 850, _____, _____

3

Q.3. How many runs are needed to complete a century?

Player	Score	Runs needed
Kohli	99	
Dhoni	88	
Rohit	80	

3

Q.4. Solve.

$$\begin{array}{r} 535 \\ + 423 \\ \hline \hline \end{array}$$

$$\begin{array}{r} 137 \\ + 440 \\ \hline \hline \end{array}$$

$$\begin{array}{r} 936 \\ - 27 \\ \hline \hline \end{array}$$

$$\begin{array}{r} 777 \\ - 209 \\ \hline \hline \end{array}$$

6

Q.5. Write numbers in words and in figures.

a) 417 _____

b) 906 _____

c) 762 _____

d) six hundred _____


e) two hundred ninety-eight _____

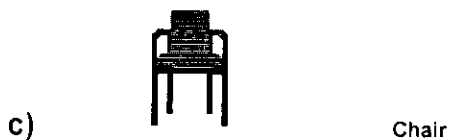
f) nine hundred twenty-three _____

12

Q.6. Observe and write the view.









3

Q.7. Divide the pictures into **two equal mirror halves** by using a **dotted** line.



2

Q.8. Solve.

a) Lali has **174 Rupees** and Mali has **270 Rupees**. How many Rupees they have in all?

8

b) There are **473 boys** and **517 girls** in a school. How many students are altogether?

c) $427 + 352 = ?$

Is the sum **more** than 700 or **less** than 700 ?

d) Place the numbers in the right places.

25

55

30

..... + = 87

..... - = 52