

Class : III

Date of Exam : 24-09-2019

Time : 3 Hrs

Subject : EVS

Marks : 80

Student's Code No. : _____

Marks Obtained :

Invigilator's Sign : _____

Checker's Sign : _____

Examiner's Sign : _____

SECTION – A OBSERVATION & REPORTING (30 Marks)**A-1. Tick (✓) the correct option and fill in the blanks .****(5X1=5)**

a. _____ is the fastest means of transport.

- i) A train ii) A bus iii) An aeroplane iv) A car

b. _____ has three forms such as dew, snow and steam.

- i) Sand ii) Water iii) Air iv) fire

c. The _____ can rotate its neck backwards to a large extent.

- i) mynah ii) crow iii) vulture iv) owl

d. _____ is eaten raw.

- i) Salad ii) Pulao iii) Sambhar iv) Rice and dal

e. Sometimes we see _____ in the sky after rain.

- i) movie ii) drama iii) rainbow iv) dance

A-2. Complete the table.**(4X1=4)**

Sr.No.	Name of sense organs	What the organ senses
Example	Eyes	See
1	Ear	
2	Tongue	
3	Skin	
4	Nose	

A-3. Match the following relations

(4X1=4)

Column I

Column II

Father

Wife

Husband

Aunt

Uncle


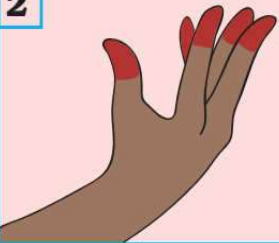

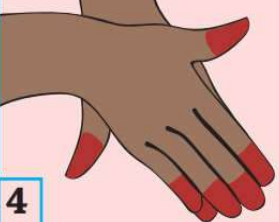
Sister

Brother

Mother

A-4. Look at these pictures .What are these called?

(2X1=2)

1 	2 
3 	4 
a) _____	b) _____



A-5. Solve the following riddles. Who am I?

(4X1=4)

a. Chhuk , chhuk , chhuk , I am on the way.

Stop, stop, stop, all the stations say.

_____.

b. Fair and white, grey and black

We arrive in a magic pack and bring rain.

_____.

c. My beak is very special; I use it like a needle,

Stitching leaves I make my home.

_____.

d. On the walls ,web I weave

where insects sticks and cannot leave.

_____.

A-6. Answer the following questions.

(3X2=6)

a. Which animals are found in or near the water? Name any two.

b. What does a washer man (Dhobi) do? Write any two works.

c. Other than birds, which are the other animals that can fly? Name any two.

A-7. What do you observe in this picture? (Write in five sentences)


(5)




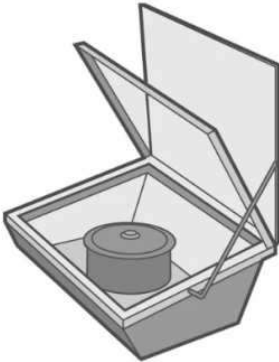
SECTION-B IDENTIFICATION & CLASSIFICATION (25 Marks)


B-1. Name the following pictures.

(4X1=4)









B-2. Give any two examples.

(5X1=5)

a) Big trees

i) _____

ii) _____

b) Sources of water.

i) _____

ii) _____

c) Leaves identified by its smell

i) _____

ii) _____

d) Utensils used for cooking

i) _____

ii) _____

e) Animals which are uninvited guest in our house

i) _____

ii) _____

B-3. Classify the following into two groups.

(3)

Bus Tonga Auto- rickshaw Aero plane Bullock-cart Handcart

i) that run on fuel

ii) that need no fuel to run

B-4. Answer the following.

(2X2=4)

a) How does the beak help the birds?

b) Why do we need a house?

B-5. How will you differentiate? Write at least one difference.

(4)

Example	vegetables	fruits
	Most vegetables are eaten cooked .	Most fruits are eaten uncooked.
1	House	Home
	_____	_____
2	Crow	Cuckoo
	_____	_____

B-6. Write a short note on “Water”. (Minimum 50 words)

(5)

SECTION-C DISCOVERY OF FACTS

(25 Marks)

C-1. In the maze given below encircle five sources of water and write them in the blanks given below.

(5)

W	A	T	E	R	F	A	L	L	L
P	G	A	L	I	S	E	A	C	R
O	F	P	M	V	L	A	K	E	D
N	L	E	W	E	L	L	E	C	M
D	A	S	P	R	I	N	G	U	I
R	A	I	N	S	T	R	E	A	M

What are the sources of water that you got in the maze ?

C-2. Name the following statement in one word

(5)

a. People in Hongkong call the snakes.

b. Children who can not speak and hear are taught language.

c. A bird which can imitate our voice is

d. A means of transport without wheel

e. You can see in your house a lazy uninvited guest.

C-3. State true or false

(4)

a. People in Kashmir cook fish in mustered oil.




b. Small children and old people can eat bhutta easily.

c. We have six sense organs.

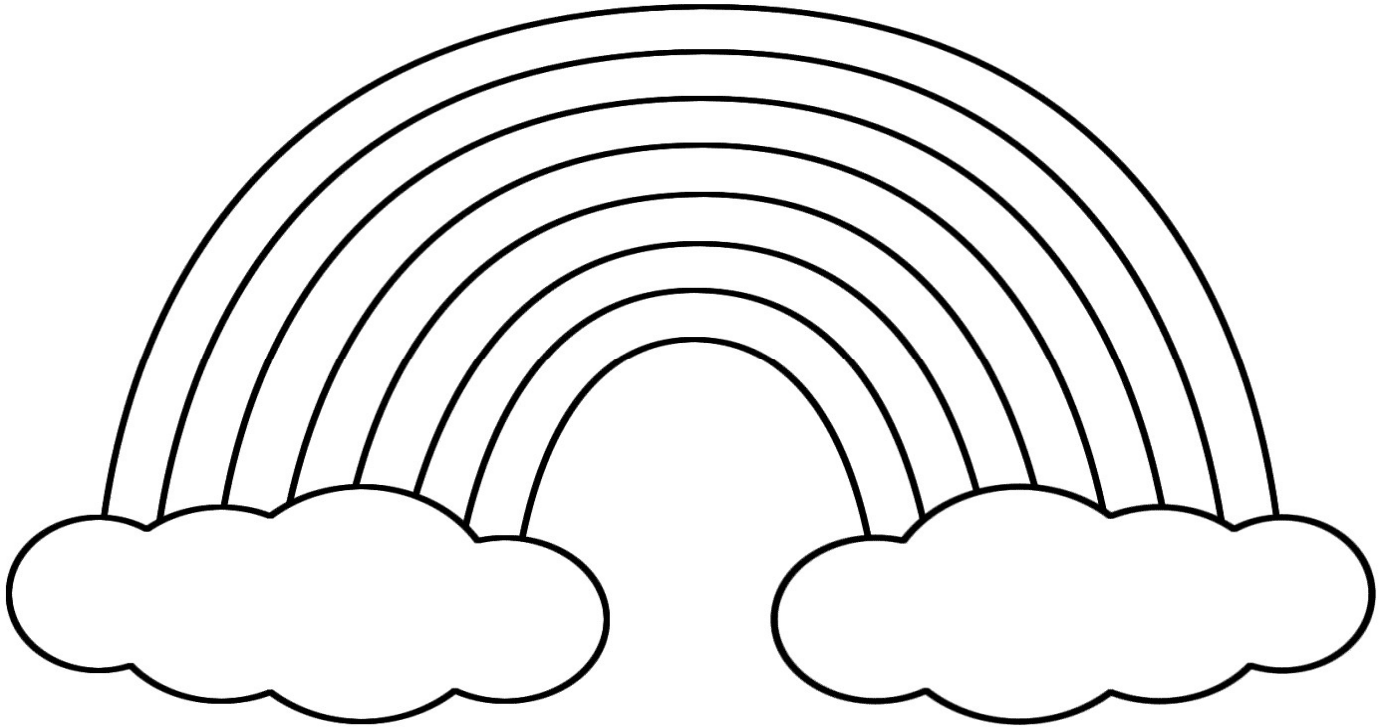
d. Snow is the solid form of water.

C-4. Name the picture and write what is it used for?

(6)

PICTURE	NAME OF THE VEHICLE	USED FOR
	_____ _____	_____ _____ _____
	_____ _____	_____ _____ _____
	_____ _____	_____ _____ _____

C-5.. Colour the rainbow in proper order and answer the questions that follow. (5)



a. When do you see a rainbow?

b. Where do you find a rainbow?

c. How many colours do you find in a rainbow?
