

Atomic Energy Education Society

Half-Yearly Examination (2018-19)

Class : IV

Date of Exam: 03-10-2018

Time : 3 Hrs

Subject : EVS

Marks : 80

Student's Name: _____

Roll No. _____ Class/Sec : _____

Invigilator's Sign: _____ Examiner's sign : _____

Checker's Sign : _____ Marks Obtained : _____

SECTION-A (30 MARKS)

I. A. Fill in the blanks

(5x1M = 5 Marks)

1. The people living in Khejadli village are called _____.
2. Insects collect _____ from flowers.
3. An _____ is a mass of land surrounded by water on all sides.
4. A _____ is a structure that is built over a road, railway, river etc . to cross from one side to another.
5. _____ is a project that tells extraordinary tales of ordinary girls.

B. Match the following:

(5x1M=5Marks)

- | | | |
|----------------|----------------------|-----|
| 1. Trolley | Dera Gazikhan | () |
| 2. Goa | Marathi | () |
| 3. Maharashtra | Ladakh | () |
| 4. Anita | Konkani | () |
| 5. Chetandas | Muzaffarpur district | () |

C. Choose the correct answer:

(5x1M=5marks)

1. The oldest _____ elephant is the leader of the herd.
(female / male)
2. _____ belongs to Bochaha village in Bihar.
(Anita / Amrita).
3. _____ protects us and our things in a railway station. (Porter / Railway police)
4. Arrival of a new baby sister brought a change in _____ family. (Nimmi's / Tsering's)
5. Cow dung is mixed with _____ to coat the floor.
(cement / mud)

D. Write short answers.

(5 x 2M = 10 Marks)

1. What is a Vallam?

2. How are plants useful to animals and birds?

3. What is the Law on Child Marriage?

4. What are floods?

5. Who is a Coach?

E. Some portions of the time-table for the route of the train on which Omana travelled are given below. Look at it carefully and answer the following questions: (5 x 1M= 5 Marks)

Sl.No	Station name	Arrival time	Departure time	Distance (Kilometer)	Day
1	Gandhidham	—	05.15	0	1
2	Ahmedabad	11.30	11.50	301	1
3	Vadodara	14.03	14.10	401	1
4	Surat	16.15	16.20	530	1
5	Valsad	17.23	17.25	598	1
6	Bhiwandi Road	21.10	21.12	772	1
7	Madgaon	07.35	07.45	1509	2
8	Udupi	12.06	12.18	1858	2
9	Kozhikode	17.45	17.50	2165	2
10	Trichur	21.05	21.10	2280	2
11	Ernakulam Town	22.35	22.40	2356	2
12	Kottayam	23.50	23.55	2418	2

1. From which station did the train start?

2. How many minutes did the train stop at Ahmedabad station?

3. On which day of the journey did the train reach Madgaon?





4. At what time did the train reach Kottayam?


5. How many kilometers did Omana travel by train?

SECTION-B (25 MARKS)

II. A. Identify the pictures and write the names

(5x1M=5Marks)

Question No.	Pictures	Names
1.		1. _____
2.		2. _____
3.		3. _____
4.		4. _____

5.		5. _____
----	---	----------

B. Circle the odd one out

(5x1M = 5Marks)

- | | | | | |
|----------|-------|---------|------------------|-----------|
| 1. dog | frog | lizard | snake | crocodile |
| 2. bee | ant | spider | mosquito | butterfly |
| 3. car | cycle | bus | auto | van |
| 4. eyes | ears | nose | hair | skin |
| 5. tiger | panda | jackass | mountain gorilla | dinosaur |

C. Answer briefly

(2x1M = 2 Marks)

1. Write two differences between animals which lay eggs and animals that give birth to young ones.

Animals which lay eggs	Animals which give birth to young ones
1.	1.
2.	2.

2. Why was it so crowded at the door of the coach in which Omana travelled?

(1 x 2M =2Marks)

3. Give two examples:

(2 x 1M= 2 Marks)

a) Two animals used by the people to earn their livelihood:

1. _____

2. _____

b) Two things that dissolve in water:

1. _____

2. _____

4. Give reasons:

(2 x 2 m= 4 marks)

a) Oil floats on water surface but stone sinks in it.

b) We should be careful while walking on the snow.

D. Write a short note on the game “ Kabbadi.”

(1 x 5 M = 5 Marks)

SECTION-C (25 MARKS)

III. A. State whether True or False: (5 x 1M = 5 Marks)

1. Pure water is colourless. _____
2. Khejadi tree is mainly found in desert areas. _____
3. Kannauj district is in Uttarpradesh. _____
4. Madhubani design is popular in Bihar. _____
5. In the hills of Uttarakhand, is a place called 'Valley of flowers'.

B. Who am I? (5X 1M=5 Marks)

1. I make your work easy to lift or lower various things.
I help the trolley to move across the iron rope. _____
2. I am a weight lifter from Andhra Pradesh. I have won 29 medals.

3. The basket is the only home I have. I hiss to scare you. _____
4. I am an area of low land lying between hills or mountains.

5. I am a sandy place and get very less rain fall.
People use camels or camel carts to cross me.

C. Answer in two sentences.

(3x2M=6 Marks)

1. What is a tunnel?

2. In what ways does the Railway time-table help the common people?
Mention any two uses.

3. Define Jungle.

4. Complete the table.

(4 x ½ M = 2 Marks)

Work	Tools	Name of the person
1. Fitting pipes	Saw, pipes, taps	
2. Wiring	Tester, screw driver, wires	
3. Digging soil	Spade, pan	
4. Building house	Cement, bricks, sand, iron rods	

5. Draw, colour and name the flower that grows on water.

(1 x 2 M=2 Marks)

E. Locate and shade the following states on the map (5x1M=5 Marks)

Gujarat, Rajasthan, Bihar, Uttarakhand, Kerala.

