

Atomic Energy Central School, Rawatbhata

Half Yearly Examination-2019-20

Class : IV

Date of Exam : 25-09-2019

Time : 3 Hrs

Subject : EVS

Marks : 80

Student's Code No. : \_\_\_\_\_

Marks Obtained :

Invigilator's Sign : \_\_\_\_\_

Checker's Sign : \_\_\_\_\_

Examiner's Sign : \_\_\_\_\_

---

**SECTION-A (30 MARKS)**

**I. A. Fill in the blanks.**

**(5X1m=5m)**

(a) The \_\_\_\_\_ female is the leader of elephants' herd.

**(youngest/ oldest)**

(b) Litchi trees come to flower in the month of \_\_\_\_\_.

**(October/ February)**

(c) The route from Goa to Kerala has a total of \_\_\_\_\_ bridges. **(200/2000)**

(d) Mother's elder sister is called \_\_\_\_\_ in Malayalam.

**(Ammamma / Valiyamma)**

(e) Arrival of a bride brought a change in \_\_\_\_\_ family. **(Nazli's/Nimmi's)**

**B. State whether True or False.**

**(5X1m=5m)**

(i) Oil dissolves in water. [      ]

(ii) Dera Gazikhan is in India. [      ]

((iii) Ferry is a kind of boat used to travel from one place to another. [      ]

(iv) Malyalam is spoken in Kerala . [      ]

(v) An elephants sleeps 14 to 15 hours in a day. [      ]

---

**C. Find out the given place in word grid and circle them.**

**(5X1m=5m)**

- (i) Station from which Omana started her journey.
- (ii) District which is famous for **Itr** production in Uttar Pradesh
- (iii) Amrita lived in this village.
- (iv) In this state, small wooden boat vallam is used.
- (v) Konkani is spoken in this state.

A	K	A	N	N	A	U	J	W	N
D	H	W	G	U	J	A	R	A	T
G	E	A	R	R	Y	U	I	O	R
H	J	S	T	K	D	D	D	G	P
M	A	H	M	E	D	A	B	A	D
C	D	S	D	R	B	R	V	K	E
H	L	F	M	A	G	H	J	K	S
L	I	V	R	L	A	G	O	A	T
R	X	C	T	A	D	T	I	O	U


**D. Write short answers.**

**(5X2m=10m)**

1. Put the names of animals in the table below.

	Ears cannot be seen	Has hair on skin
1		
2		

2. See the picture and write the answer.



(a) What we call the group of elephants? \_\_\_\_\_

(b) How much an adult elephant can eat in one day?

Ans. \_\_\_\_\_

3. See the picture and write the answer.



(a) What is the name of design given in the picture? \_\_\_\_\_

(b) Which type of colours are used in this design?

Ans. \_\_\_\_\_

\_\_\_\_\_

\_\_\_\_\_

4. Write two reasons which causes change in family.

Ans. \_\_\_\_\_  
\_\_\_\_\_  
\_\_\_\_\_

5. Observe the given railway ticket and write the answer.



- (a) PNR Number-\_\_\_\_\_ (b) Train Number-\_\_\_\_\_
- (c) Number of passengers-\_\_\_\_\_ (d) Date of journey-\_\_\_\_\_

E. Write 5 sentences on Khejadi Tree or Karnam Malleshwari.





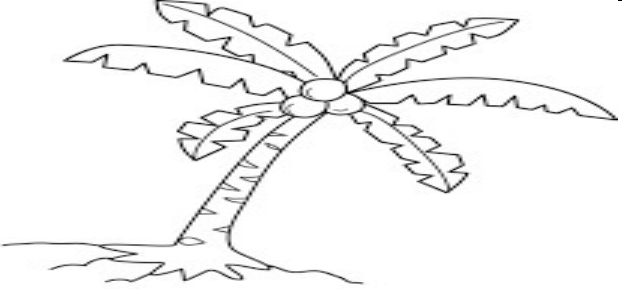
5M

Ans. \_\_\_\_\_  
\_\_\_\_\_  
\_\_\_\_\_  
\_\_\_\_\_  
\_\_\_\_\_

**SECTION-B (25 MARKS)**

**II.A. Identify the pictures and write the names.**

**(5X1m=5m)**

	<p><b>(a)</b></p>
 <p>shutterstock.com • 1416707231</p>	<p><b>(b)</b></p>
	<p><b>(c)</b></p>
	<p><b>(d)</b></p>
	<p><b>(e)</b></p>

**B. Give two examples for each.**

**(5X1m=5m)**

- (1) Flowers used for making scent \_\_\_\_\_, \_\_\_\_\_
- (2) Insects which live in group \_\_\_\_\_, \_\_\_\_\_
- (3) Plants which do not have flowers \_\_\_\_\_, \_\_\_\_\_
- (4) Trees whose wood do not get affected by insects \_\_\_\_\_, \_\_\_\_\_
- (5) Games in which central line is important \_\_\_\_\_, \_\_\_\_\_.

**C. Give reasons.**

**(2x2=4m)**

1. Numbers of tigers are going down in India.

Ans. \_\_\_\_\_  
\_\_\_\_\_

2. There was so much smoke and noise from the vehicles at the level crossing.

Ans. \_\_\_\_\_  
\_\_\_\_\_

**D. Write short answers.**

**(3x2m=6m)**

(i) Write two works of worker bee.

Ans. \_\_\_\_\_  
\_\_\_\_\_  
\_\_\_\_\_  
\_\_\_\_\_

(ii) Write 2 differences between cement and bamboo bridge?

	<b>Bamboo Bridge</b>	<b>Cement Bridge</b>
<b>1</b>		
<b>2</b>		

(iii) What was the difference in the scene that Omana saw from the train on the first day and on the second day?

<b>First Day</b>	<b>Second Day</b>

**E. Write the work of :-**

**(1X5m=5m)**

(i) Carpenter-\_\_\_\_\_

(ii) Mason-\_\_\_\_\_

(iii) Ticket checker-\_\_\_\_\_

(iv) Coach-\_\_\_\_\_

(v) Coolie / porter-\_\_\_\_\_

**SECTION-C (25 Marks)**

**III.A. Circle the odd one out.**

**(5X1m=5m)**

- |              |           |          |        |           |
|--------------|-----------|----------|--------|-----------|
| (a) Honeybee | Ant       | Termite  | Wasp   | Snake     |
| (b) Frog     | Cow       | Tiger    | Cat    | Fox       |
| (c) Lizard   | Sparrow   | Parrot   | Pigeon | Mouse     |
| (d) Rose     | Jasmine   | Marigold | Lotus  | Sunflower |
| (e) Valsad   | Ahmedabad | Goa      | Udipi  | Kottayam  |

**B. Match the following places with their states.**

**(5X1m=5m)**

- |                        |                 |
|------------------------|-----------------|
| (a) Khejadli Village   | (i) Haryana     |
| (b) Madhubani District | (ii) Gujarat    |
| (c) Sohana Village     | (iii) Karnataka |
| (d) Valsad             | (iv) Rajasthan  |
| (e) Udipi              | (v) Bihar       |

(a)\_\_\_\_\_ (b)\_\_\_\_\_ (c)\_\_\_\_\_ (d)\_\_\_\_\_ (e)\_\_\_\_\_

**C. Write short answers.**

**(5X2m=10m)**

(i) Why did king's men come to Amrita's village?

Ans. \_\_\_\_\_  
\_\_\_\_\_  
\_\_\_\_\_

(ii) How did Anita arrange money for bee-keeping?

Ans. \_\_\_\_\_  
\_\_\_\_\_  
\_\_\_\_\_



(iii) Write 2 reasons of water pollution.


Ans. \_\_\_\_\_  
\_\_\_\_\_  
\_\_\_\_\_

(iv) What is Girl Star?

Ans. \_\_\_\_\_  
\_\_\_\_\_  
\_\_\_\_\_

(v) Draw a picture showing any one way of cleaning the water and name it.

Ans.



**D. Locate and shade the following state on the map.**

**(1X5m=5m)**

- (a) Gujarat (b) Rajasthan (c) Bihar (d) Kerala (e) Goa

